



Arithmeti



Good Morning Year 6!

Today you are looking at multiplying a 4-digit number by a 1-digit number.



Go through the slides as best you can.



Complete the activity uploaded separately.



If you would like your work marked, please bring it in Monday.



Arithmetic




Th	H	T	O
1,000 1,000	100 100	10	1 1 1
1,000 1,000	100 100	10	1 1 1
1,000 1,000	100 100	10	1 1 1


This place value chart is showing us:

$$2213 \times 3 =$$





Arithmetic




What is this one showing us?

Th	H	T	O
●	● ●		● ● ●
●	● ●		● ● ●
●	● ●		● ● ●
●	● ●		● ● ●

4
 8
 0
 12

$1203 \times 4 = 4812$

How would
write this
number?





Arithmetic



Over to you!

You are now going to have some time to complete your independent assignment which can be found on Teams.



Complete the activity uploaded separately.



If you would like your work marked, please bring it in Monday.

Please don't worry if you cannot complete today's learning.
We will be going through today's learning in school.