

Put in the correct symbols

1

	+	-	=	
22	<input type="text"/>	9	<input type="text"/>	13

1 mark

Fill in the missing numbers.


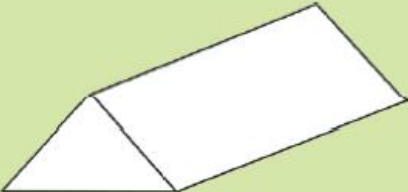
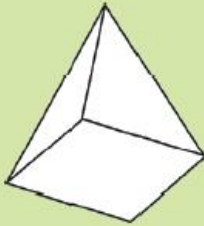

2

<input type="text"/>	,	<input type="text"/>	,	<input type="text"/>	,	40	,	50	,	60
----------------------	---	----------------------	---	----------------------	---	----	---	----	---	----

1 mark

Tick the shape with 4 faces.

3

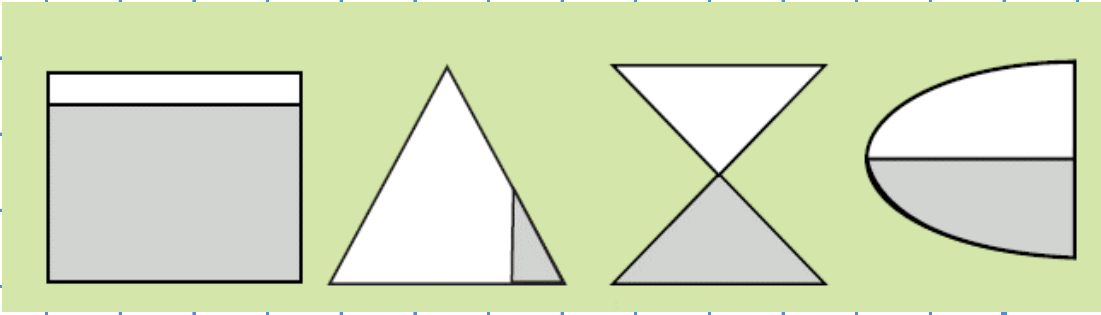
			
---	---	--	---

1 mark

TOTAL MARK:

Tick the shapes that have a half coloured.

7



1
mark

Match the numbers to the words.

8

18	eleven
14	eighteen
11	fourteen

1
mark

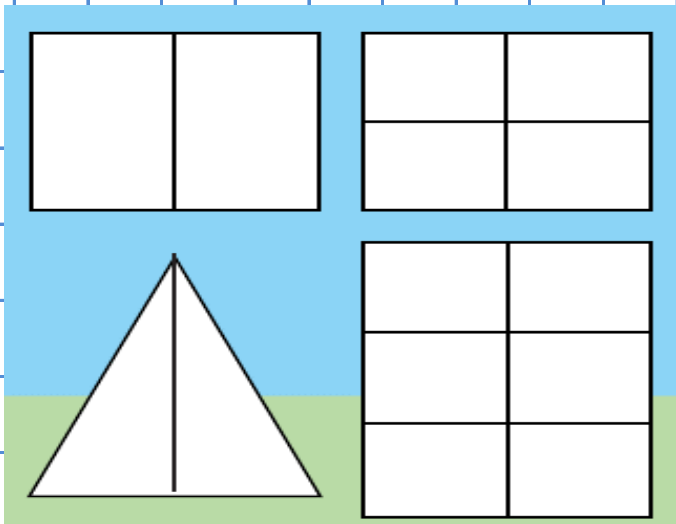
What is half of 14?

9

1
mark

colour a half of each shape


10



1 mark

Tick the clock that says half past 12

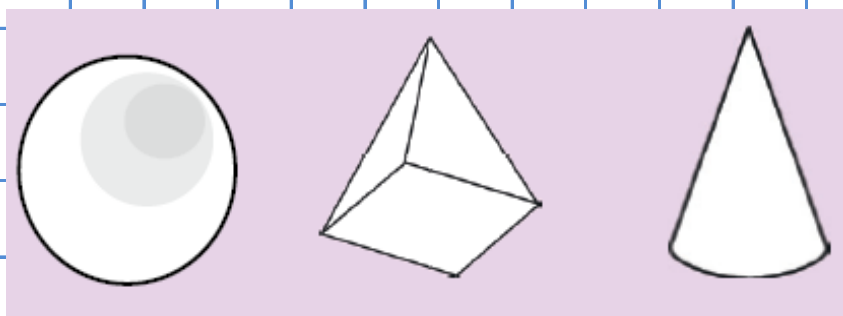
11



1 mark

Put a tick on the sphere.

12



1 mark