


What number comes next?

5, 10, 15, 20,

1

1  
mark

Tim has 6 sweets. He wants to share them with a friend. How many will they each have?



2

1  
mark

Write a number that is more than 6 and less than 10


3

1  
mark

TOTAL MARK:

What is one less than 30?


4



1  
mark

$20 - 10 =$

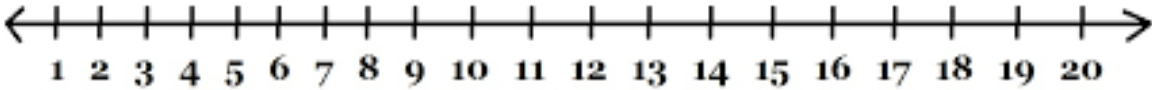
5



1  
mark

show 19 take away 4 =

6



1  
mark



How much money?

10



1  
mark

11

$$6 + \square = 20$$

1  
mark

Write 16 in words

12

1  
mark