

Put a ring around the largest number

1

11 8 16 19 14

1
mark

Put a ring around the smallest number

2

11 8 16 19 14

1
mark

Put a ring around the number that is one more than 10

3

11 8 16 19 14

1
mark

TOTAL MARK:

Put a ring around the number that is one less than 15


4

11 8 16 19 14

1
mark

How many bees are there


5



1
mark

Draw where you think number 5 should be on the number line

6



1
mark


What is 6 more than 5?

7

1
mark

Put a ring around the seventh crayon

8



1
mark

How many days are there in one week?

9

1
mark

What time is it?

10



1
mark

Write a number greater than 12

11

1
mark

13 minus 6

12

1
mark