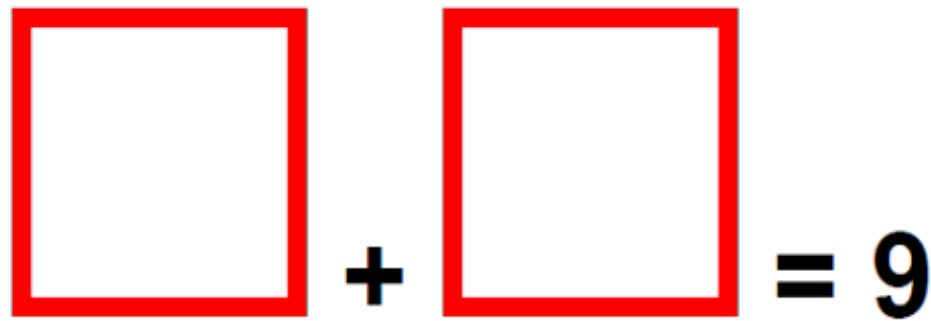


Write two numbers with a sum of 9

1



A grid with two red squares, a plus sign, and the number 9. The grid is 10 columns wide and 10 rows high. The two red squares are positioned in the second and third columns, and the plus sign and the number 9 are positioned in the fourth and fifth columns.

1
mark

7 is one more than what number?

2



1
mark

What is 6×2 ?

3




1
mark

TOTAL MARK:

What is one less than 25?

4




1
mark

Write the next number

5

15 17 19 21



1
mark

What is the sum of 10 and 6?

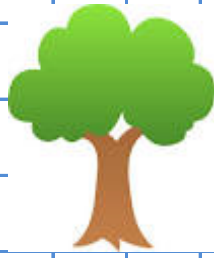
6



1
mark

There are 5 apples on each tree, how many apples altogether?

10



| |
|--|
| |
|--|

1
mark

Circle number forty five

11

54

45

| |
|--|
| |
|--|

1
mark

What is 6 plus 6?

12

| |
|--|
| |
|--|

1
mark