

Name: \_\_\_\_\_ Date: \_\_\_\_\_

Write an even number between 11 and 15

1

1  
mark

Write an odd number between 12 and 16

2

1  
mark

What is 4 more than 16


3

1  
mark

TOTAL MARK:

What is double 4?

4



1 mark

How many socks are there in 3 pairs

5



1 mark

Look at the number pattern. Write the next number


6

5 3 5 3 5 3

1 mark

What is double 3?

7




1  
mark

Half of 12

8


1  
mark

15 plus 3

9


1  
mark

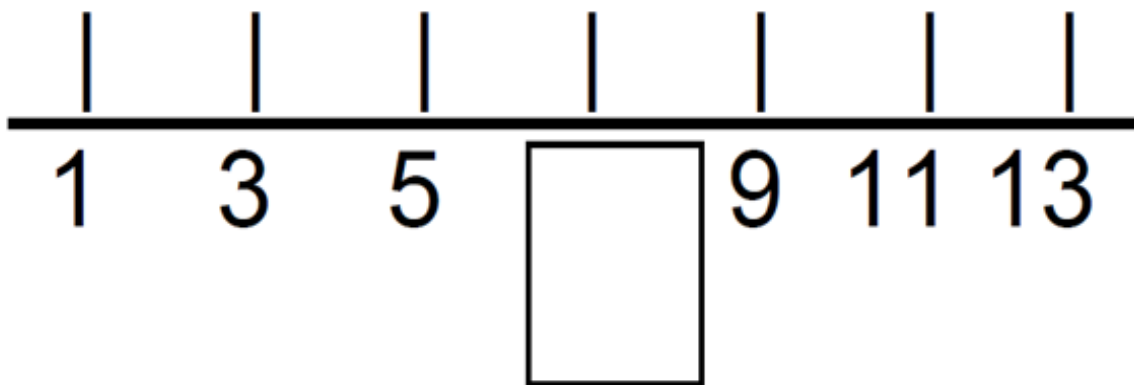
How many wheels do 4 bikes have?



10

1  
mark

Write the missing number



11

1  
mark

14 divided by 2

12

1  
mark