
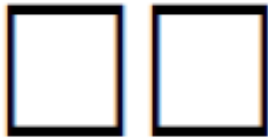




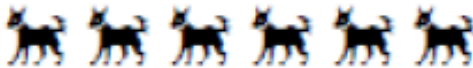






Year 1 Block 1 Test 1
Answer Sheet

Name:

Date:

1.		6.	8 7 6 5 
2.	5 6 7 8 	7.	
3.	 	8.	
4.		9.	 cakes
5.	4 and 2 is 	10.	 claps

1. What number comes after 16?
2. Write the missing number in the box
3. Count how many envelopes. Write your answer in the box
4. What number comes before 20?
5. What is the total of 4 and 2?
6. Write the next two numbers
7. What is 24 take away 1?
8. Put a ring around the fourth dog
9. I have 15 cakes, I give 5 away. How many are left?
10. Count how many claps I do (clap nine times)