


What number comes next?

1


14 16 18



1  
mark

Tim has 10 sweets. He wants to share them with a friend. How many will they each have?

2



1  
mark

Write a number that is fewer than 7

3

1  
mark

TOTAL MARK:

What is one less than 25?

4

1  
mark

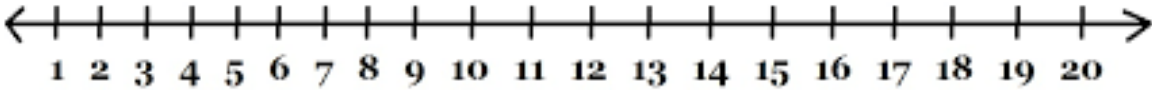
20 minus 8

5

1  
mark

Show 13 add 6. Write your answer

6



1  
mark

Double 8. Draw your working out.

7



1  
mark

What number comes next?

8

70 80 90



1  
mark

An ant has 6 legs. How many legs do 2 ants have?

9



1  
mark

What comes next?

10

35 40 45 50

1  
mark

What is the total cost?

11



4p



5p

1  
mark

Write 19 using the word

12

1  
mark